







Practice Exercises

Name: _____ Date: _____

"Get a Good Night's Sleep"

Chris is trying to fall asleep by counting sheep. Can you help him? Write the total number of each type of sheep in the boxes below.



A	B	C	D	E
				

- How many sheep are there total? _____
- Which type of sheep are there the most of? _____
- Which type of sheep are there the least of? _____
- What two types of sheep are there equal amounts of? _____
- If you added up all the sheep from group A to group C, how many sheep would you have? _____

