

Practice Exercises

Name: _____ Date: _____


“Get a Good Night’s Sleep”

Chris is trying to fall asleep by counting sheep. Can you help him?


1. How many black sheep?




2. How many white sheep?



3. How many spotted sheep?



Count the sheep in the pen below!



- How many sheep are there in all? _____
- Which type of sheep are there more of? _____
- Which type of sheep are there less of? _____
- What two types of sheep are equal? _____
- If you added up all the sheep from Group 1, Group 2, and Group 3, how many sheep would you have? _____

