




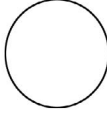








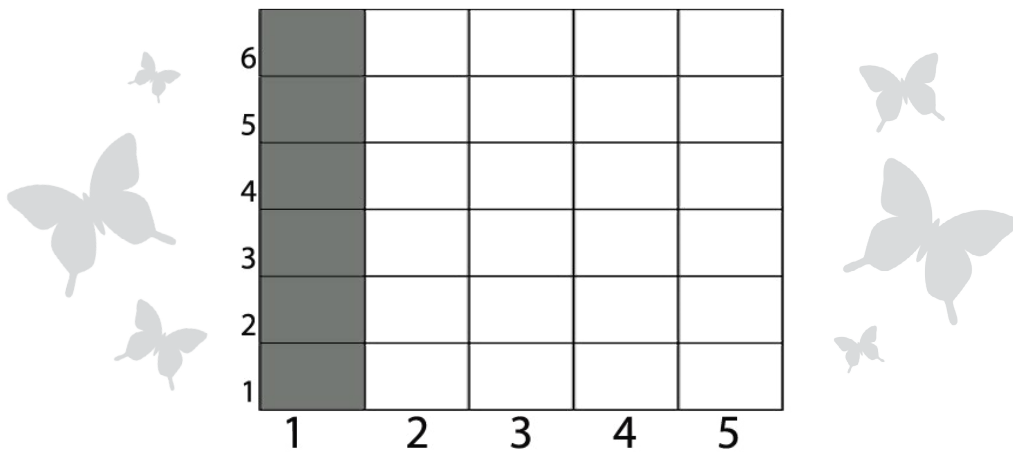
Practice Exercises

Name: _____ Date: _____

"Always Be a Good Sport"

The WonderGrove Kids are all playing soccer together with their friends. Solve the math problem beneath each kid. Then put the kids in numerical order from largest to smallest by writing their position in the bubble above their heads.

					
					
$\begin{array}{r} 14 \\ +6 \\ \hline \end{array}$	$\begin{array}{r} 48 \\ +2 \\ \hline \end{array}$	$\begin{array}{r} 36 \\ +4 \\ \hline \end{array}$	$\begin{array}{r} 55 \\ +5 \\ \hline \end{array}$	$\begin{array}{r} 22 \\ +8 \\ \hline \end{array}$	$\begin{array}{r} 8 \\ +2 \\ \hline \end{array}$



- How many kids are playing soccer in all? 6
- How many soccer balls do the kids have in all? _____
- How many kids are wearing shorts? _____
- How many boys are in line? _____
- How many girls are in line? _____

