







# Practice Exercises

Name: \_\_\_\_\_ Date: \_\_\_\_\_

## "Make a Homemade Garden"

Maria has been tending to her garden all summer. Now it's fall and time to harvest. Chris, Peter, and Dee have all come over to help her out. Can you help her organize all her fruits and vegetables too? Use the grid to help you keep track!

 apple										
 lettuce										
 strawberry										
 pepper										
 carrot										
 pumpkin										
	1	2	3	4	5	6	7	8	9	10

1. Maria harvested 6 apples, 5 carrots, and 3 pumpkins. Which one did she harvest the most of? \_\_\_\_\_
2. Maria harvested 10 heads of lettuce.
3. Maria picked 5 strawberries. Chris picked 2, and Peter picked 2. How many total strawberries did they pick? \_\_\_\_\_
4. Maria picked 3 peppers and Chris picked 5. How many peppers do they have? \_\_\_\_\_
5. Uh oh! Chris ate 3 of the 5 carrots Maria and he picked. How many carrots are left? \_\_\_\_\_
6. Maria picked 5 pumpkins, Dee picked 1, and Chris picked 2. How many pumpkins did they pick? \_\_\_\_\_

