

Practice Exercises

Name: _____ Date: _____


"Don't Talk to People You Don't Know"

Little Red Riding Hood is learning to tell time using both digital and analog clocks. Can you help her out?

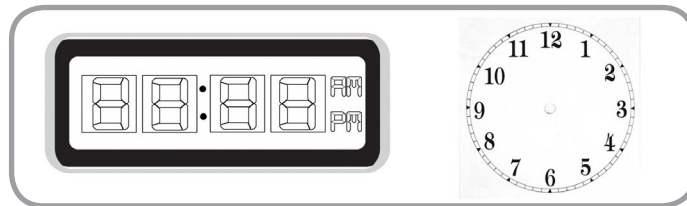
1. How many minutes are in an hour? _____
2. How many minutes are in a half-hour? _____
3. If it is A.M., it is **BEFORE** / **AFTER** noon. (Circle the correct answer)
4. If it is P.M., it is **BEFORE** / **AFTER** noon. (Circle the correct answer)



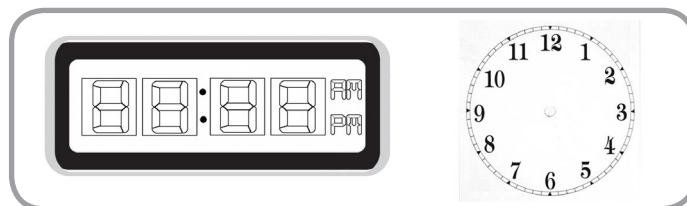
For questions 5-7, use the clocks below. Draw your answers like this: 12 P.M.



5. Little Red Riding Hood is supposed to meet her Grandmother at 2:00 P.M. How does that look on a digital clock? How does that look on an analog clock?



6. It takes Little Red Riding Hood 1 hour to walk to her Grandmother's house. If she leaves her house at 12 P.M., what time will she get there? Draw your answers below.



7. Little Red Riding Hood met the Wolf at 1:30 P.M. How does that look on a digital clock? How does that look on an analog clock?

